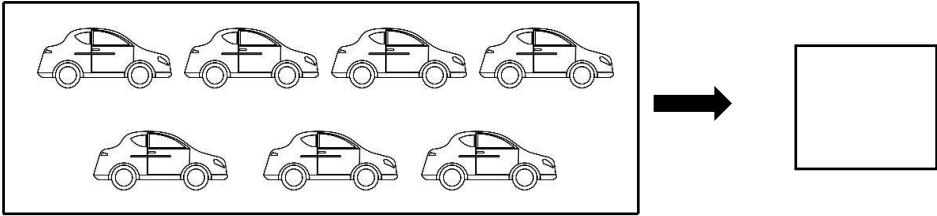



QUESTION BANK

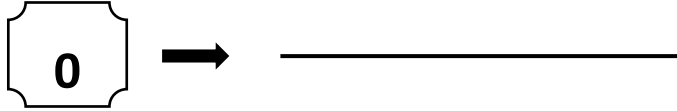
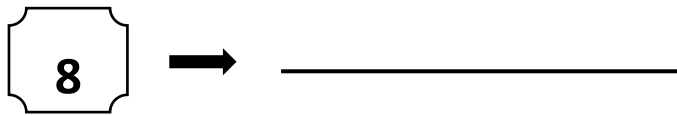
Grade 1- MATHEMATICS

Chapter 3- Numbers from 1 to 9

Q.No.	Questions	Mark
1	<p>Count and write the number</p> <div data-bbox="300 707 1241 922"></div> <p>Answer: 7</p>	
2	<p>Write the missing numbers.</p> <div data-bbox="300 1191 1043 1303"></div> <p>Answer: 6, 8</p>	

3

Write the number names.



Answer: Eight

Zero

4

Match the following.

2

9

6

Six

Two

Nine


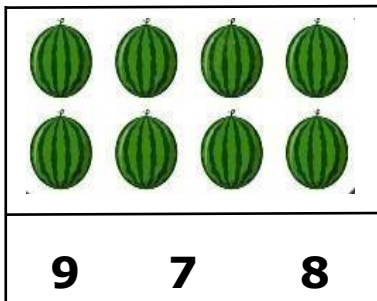
Answer: 2-Two

9- Nine

6- Six

5

Count and circle the correct number.



Answer: 8, 3

6

Count and match



9



3





8

Answer: 3, 8, 9

7

Circle the tree that have 0 apple



Answer:

